



Where in Australia? Places, Animals, and People of Australia

A Social Studies, English, Mathematics and Art Unit

Activity 1

Using an atlas, find the names of the areas/territories.



Where in Australia? Places, Animals, and People of Australia

A Social Studies, English, Mathematics and Art Unit

Using an atlas, find the listed place names and write them in the correct place on the map below.

Activity 2

Australia



1. Tasmania
2. Albany
3. Yulara
4. Darwin
5. Ballarat
6. Alice Springs
7. Cairns
8. Hobart
9. Newman
10. Kalgoorlie
11. Townsville
12. Broken Hill
13. Devonport
14. Mount Isa
15. Derby



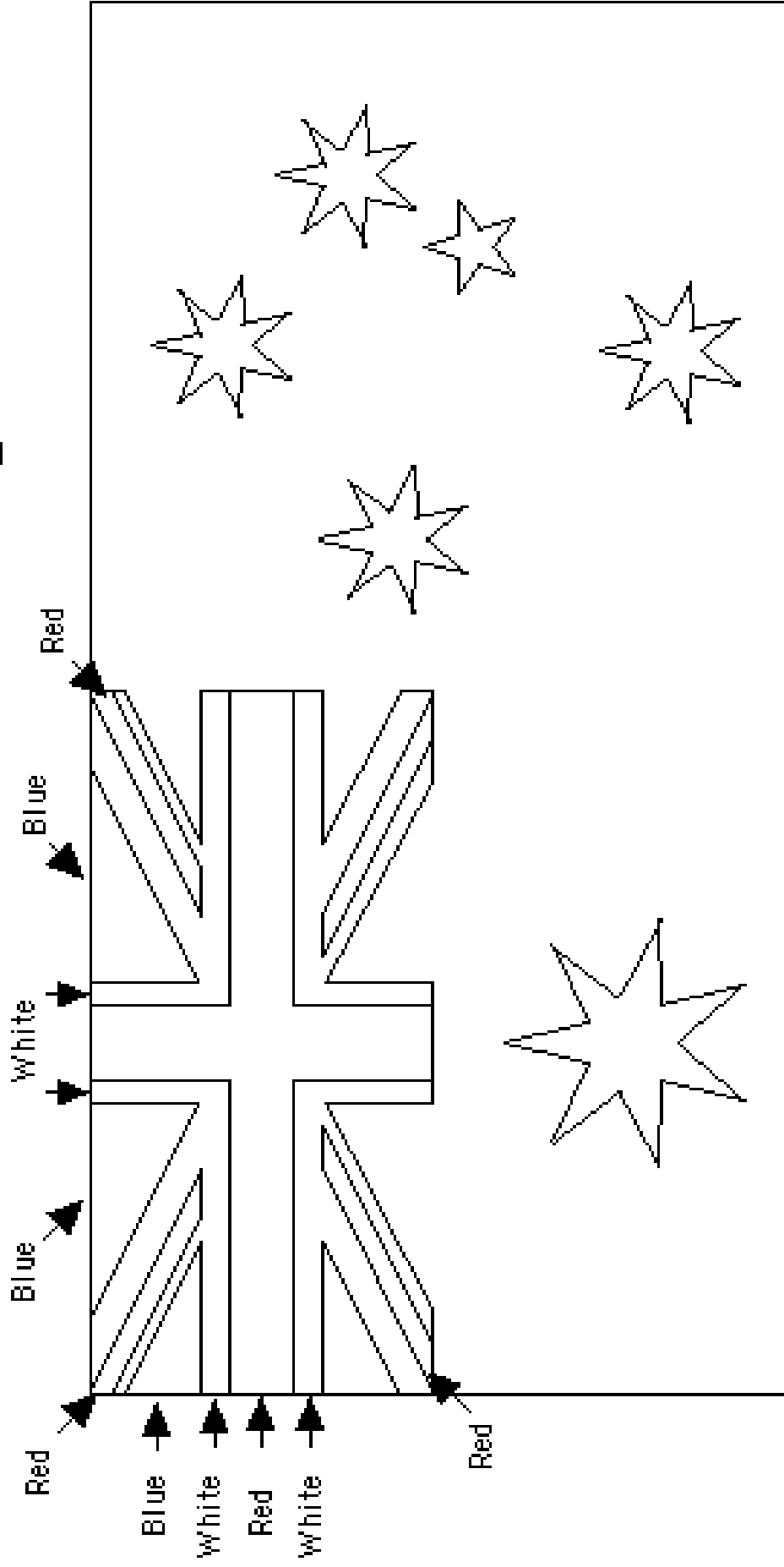
Where in Australia? Places, Animals, and People of Australia

A Social Studies, English, Mathematics and Art Unit

Activity 3

Using the correct colours, fill in the Australian Flag.

Australia's Flag



Blue background, white stars



Where in Australia? Places, Animals, and People of Australia

A Social Studies, English, Mathematics and Art Unit

Activity 4

Try and fill in as many places that you know of and which have not been named on the other maps. Try and do this without using an atlas.

Australia



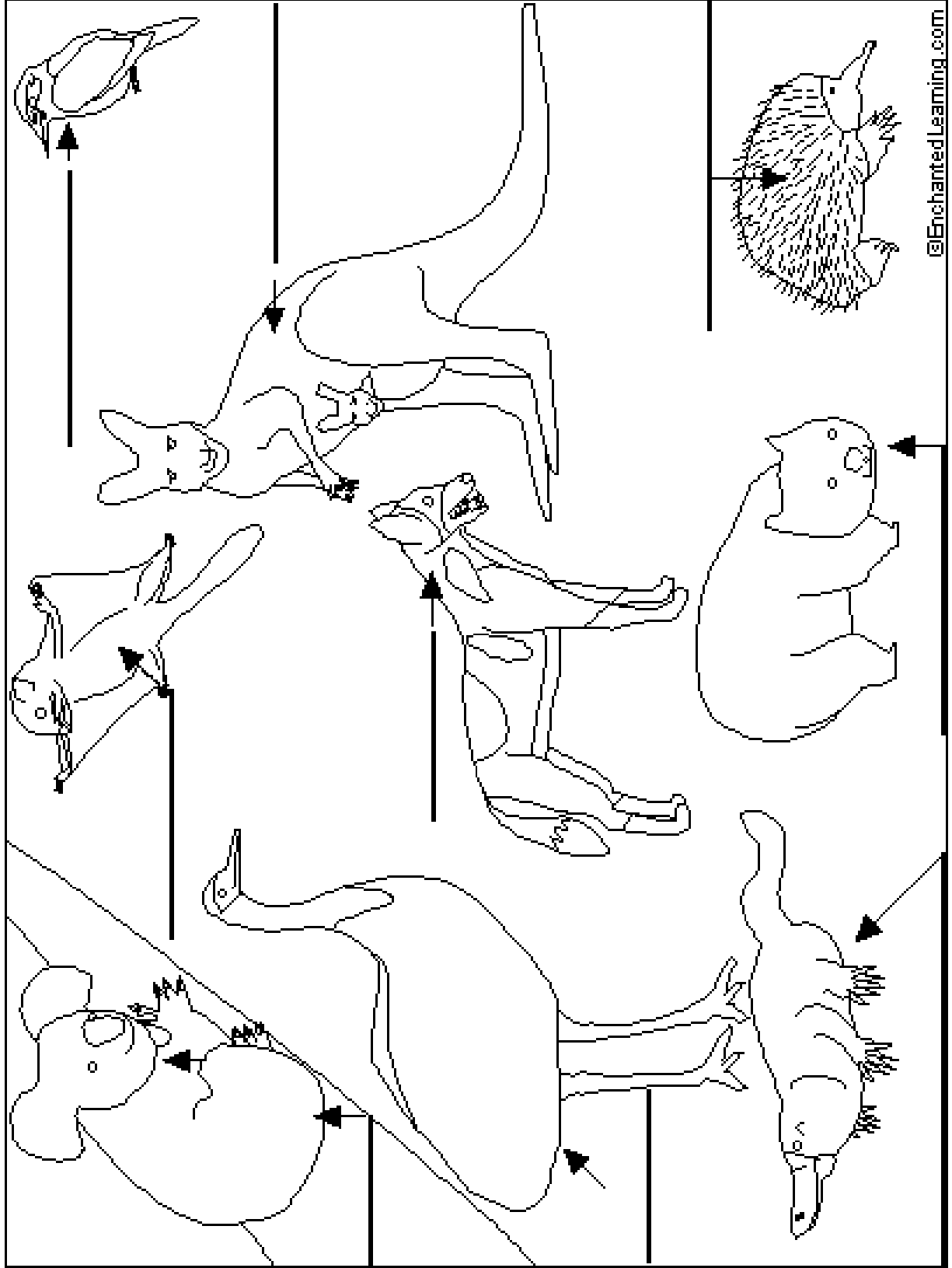



Where in Australia? Places, Animals, and People of Australia

A Social Studies, English, Mathematics and Art Unit

Activity 5

Name the animals then colour. Try and name these before looking them up.





Where in Australia? Places, Animals, and People of Australia


A Social Studies, English, Mathematics and Art Unit

Activity 6

Identify the image with the letter associated with it



A




B



C



D



F




G



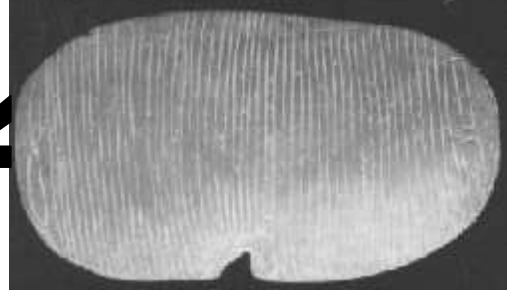
E



H



J



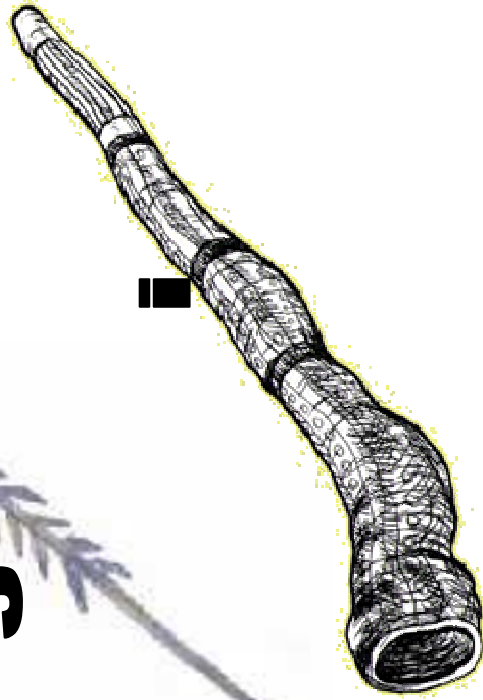
K



L



M



I



Where in Australia? Places, Animals, and People of Australia

A Social Studies, English, Mathematics, and Art Unit



Activity 7

Identify the image with the letter associated with it






Where in Australia? Places, Animals, and People of Australia

A Social Studies, English, Mathematics and Art Unit

Activity 8

Identify the image with the letter associated with it







Where in Australia? Places, Animals, and People of Australia

A Social Studies, English, Mathematics and Art Unit

Activity 9

Identify the image with the letter associated with it

. Can you make a list of any other Australian singers or bands you know?




Where in Australia Am I?



Task Card 1

A Social Studies/English Unit



1. Name of the image? _____

2. Name of the Province/Area? _____

3. Closest Major City to the place? _____

4. Special Features of the town/area? _____

5. Name of the next nearest town or city N-S-E-W of the place:
North _____ South _____ East _____ West _____

6. *Draw/illustrate/make up either of the following using icons of the area, and/or images of the town/area which give the place its local flavour/identity:*

A. Currency B. Flag C. A new icon D. A poster E. Your own idea

Where in Australia Am I?



Task Card 2

A Social Studies/English Unit



1. Name of the image? _____
2. Name of the Province/Area? _____
3. Closest Major City to the place? _____
4. Special Features of the town/area? _____
5. Name of the next nearest town or city N-S-E-W of the place:
North South East West

6. *Draw/illustrate/make up either of the following using icons of the area, and/or images of the town/area which give the place its local flavour/identity:*



A. Currency B. Flag C. A new icon D. A poster E. Your own idea

Where in Australia Am I?



A Social Studies/English Unit

Task Card 3



1. Name of the image? _____

2. Name of the Province/Area? _____

3. Closest Major City to the place? _____

4. Special Features of the town/area? _____

5. Name of the next nearest town or city N-S-E-W of the place:
North _____ South _____ East _____ West _____

6. *Draw/illustrate/make up either of the following using icons of the area, and/or images of the town/area which give the place its local flavour/identity:*

A. Currency B. Flag C. A new icon D. A poster E. Your own idea

Where in Australia Am I?



Task Card 4

A Social Studies/English Unit



1. Name of the image? _____
2. Name of the Province/Area? _____
3. Closest Major City to the place? _____
4. Special Features of the town/area? _____
5. Name of the next nearest town or city N-S-E-W of the place:
North _____ South _____ East _____ West _____

6. *Draw/illustrate/make up either of the following using icons of the area, and/or images of the town/area which give the place it's local flavour/identity:*

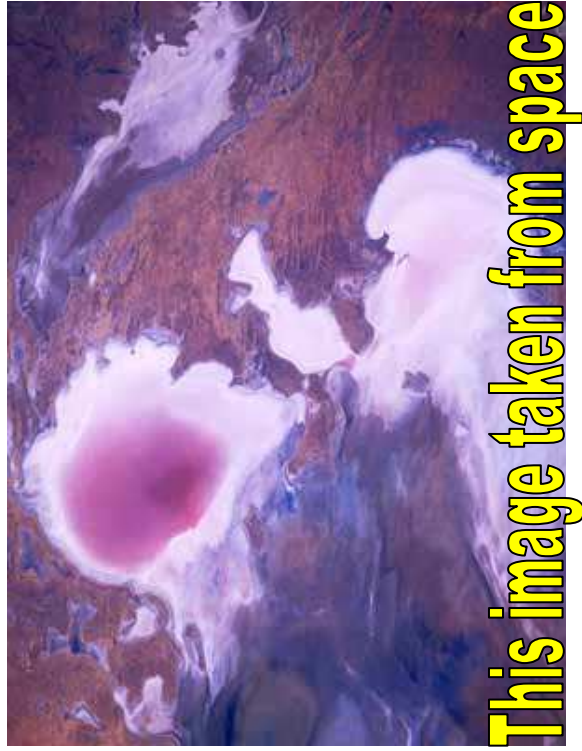
- A. Currency B. Flag C. A new icon D. A poster E. Your own idea

Where in Australia Am I?



Task Card 5

A Social Studies/English Unit



1. Name of the image? _____

2. Name of the Province/Area? _____

3. Closest Major City to the place? _____

4. Special Features of the town/area? _____

5. Name of the next nearest town or city N-S-E-W of the place:

North

South

East

West

6. *Draw/illustrate/make up either of the following using icons of the area, and/or images of the town/area which give the place it's local flavour/identity:*

A. Currency B. Flag C. A new icon D. A poster E. Your own idea

Where in Australia Am I?



Task Card 6

A Social Studies/English Unit



1. Name of the image? _____
2. Name of the Province/Area? _____
3. Closest Major City to the place? _____
4. Special Features of the town/area? _____
5. Name of the next nearest town or city N-S-E-W of the place:
North South East West

6. *Draw/illustrate/make up either of the following using icons of the area, and/or images of the town/area which give the place it's local flavour/identity:*


- A. Currency B. Flag C. A new icon D. A poster E. Your own idea

Where in Australia Am I?



Task Card 7

A Social Studies/English Unit



1. Name of the image? _____
2. Name of the Province/Area? _____
3. Closest Major City to the place? _____
4. Special Features of the town/area? _____
5. Name of the next nearest town or city N-S-E-W of the place:
North _____ South _____ East _____ West _____

6. *Draw/illustrate/make up either of the following using icons of the area, and/or images of the town/area which give the place it's local flavour/identity:*



- A. Currency B. Flag C. A new icon D. A poster E. Your own idea

Where in Australia Am I?



Task Card 8

A Social Studies/English Unit




1. Name of the image? _____
2. Name of the Province/Area? _____
3. Closest Major City to the place? _____
4. Special Features of the town/area? _____
5. Name of the next nearest town or city N-S-E-W of the place:
North South East West

6. *Draw/illustrate/make up either of the following using icons of the area, and/or images of the town/area which give the place it's local flavour/identity:*

A. Currency B. Flag C. A new icon D. A poster E. Your own idea

Where in Australia Am I?



Task Card 9

A Social Studies/English Unit




1. Name of the image/s? _____
2. Name of the Province/Area? _____
3. Closest Major City to the place? _____
4. Special Features of the town/area? _____
5. Name of the next nearest town or city N-S-E-W of the place:
North _____ South _____ East _____ West _____
6. *Draw/illustrate/make up either of the following using icons of the area, and/or images of the town/area which give the place it's local flavour/identity:*
A. Currency B. Flag C. A new icon D. A poster E. Your own idea

Where in Australia Am I?



Task Card 10

A Social Studies/English Unit




1. Name of the image? _____
2. Name of the Province/Area? _____
3. Closest Major City to the place? _____
4. Special Features of the town/area? _____
5. Name of the next nearest town or city N-S-E-W of the place:
North _____ South _____ East _____ West _____

6. Draw/illustrate/make up either of the following using icons of the area, and/or images of the town/area which give the place it's local flavour/identity:


- A. Currency B. Flag C. A new icon D. A poster E. Your own idea

Where in Australia Am I?



Task Card 11

A Social Studies/English Unit




1. Name of the image? _____
2. Name of the Province/Area? _____
3. Closest Major City to the place? _____
4. Special Features of the town/area? _____
5. Name of the next nearest town or city N-S-E-W of the place:
North South East West

6. *Draw/illustrate/make up either of the following using icons of the area, and/or images of the town/area which give the place its local flavour/identity:*

- A. Currency B. Flag C. A new icon D. A poster E. Your own idea

Where in Australia Am I?



Task Card 12

A Social Studies/English Unit



1. Name of the image? _____

2. Name of the Province/Area? _____

3. Closest Major City to the place? _____

4. Special Features of the town/area? _____

5. Name of the next nearest town or city N-S-E-W of the place:
North South East West

6. *Draw/illustrate/make up either of the following using icons of the area, and/or images of the town/area which give the place its local flavour/identity:*

A. Currency B. Flag C. A new icon D. A poster E. Your own idea



Where in Australia Am I?



Task Card 13



A Social Studies/English Unit



1. Name of the images? _____
2. Name of the Province/Area? _____
3. Closest Major City to the place? _____
4. Special Features of the town/area? _____
5. Name of the next nearest town or city N-S-E-W of the place:
North _____ South _____ East _____ West _____


6. *Draw/illustrate/make up either of the following using icons of the area, and/or images of the town/area which give the place its local flavour/identity:*

- A. Currency B. Flag C. A new icon D. A poster E. Your own idea



ourbr!isbane.com

Where in Australia Am I?




Task Card 14

A Social Studies/English Unit



1. Name of the image? _____
2. Name of the Province/Area? _____
3. Closest Major City to the place? _____
4. Special Features of the town/area? _____
5. Name of the next nearest town or city N-S-E-W of the place:
North _____ South _____ East _____ West _____
6. *Draw/illustrate/make up either of the following using icons of the area, and/or images of the town/area which give the place its local flavour/identity:*
A. Currency B. Flag C. A new icon D. A poster E. Your own idea

Where in Australia Am I?



Task Card 15

A Social Studies/English Unit

Make up your own one with images and answers.

1. Name of the image? _____
2. Name of the Province/Area? _____
3. Closest Major City to the place? _____
4. Special Features of the town/area? _____
5. Name of the next nearest town or city N-S-E-W of the place:
North _____ South _____ East _____ West _____
6. *Draw/illustrate/make up either of the following using icons of the area, and/or images of the town/area which give the place its local flavour/identity:*
A. Currency B. Flag C. A new icon D. A poster E. Your own idea



Where in Australia? Places, Animals, and People of Australia

A Social Studies, English, Mathematics and Art Unit



Activity 11

Answer the following general knowledge questions about Australia.

- Who is the PM of Australia (2010)?
- What is the official National Anthem of Australia?
- What is the name of the song that some people think is the National Anthem?
- What is the internet code?
- What is the population?
- Who is the Governor General?
- The Capital is?
- The GPS of the Capital is?
- What was the largest penal colony?
- What are three of Australia's neighbours (countries)?
- The tallest mountain is?
- What is 'The Outback'?
- What is the emblem of Queensland?
- What animal is native to Australia: the Koala or the Panda?
- Are there any rainforests in Australia?
- Fossils of which dinosaurs have been found in Australia?
- When was the Sydney Harbour bridge opened?
- When was the Sydney Opera House opened?
- Central Australia's 2nd most famous rock formation consisting of a series of rocky domes is called?
- The largest opal mining town sees 80% of its population living underground. This town is called?
- At what Western Australian pearling port lies the world renowned Cable Beach?
- West of Sydney, what is the mountain range home to the Three Sisters?
- North of Brisbane what is the place called famous for whale watching (Kaikoura in NZ)?
- What is the international calling code?
- What is the currency?
- It is the _____ largest country in the world.
- The official language/s is/are?
- The largest city is?
- This image is called the?
- The Koala eats what plant?
- The longest river is?
- What are wild dogs called?
- The largest salt lake is?
- Is the Great Barrier Reef the largest in Australia?
- What is the name of the town famous for its pearls?





Where in Australia? Places, Animals, and People of Australia

A Social Studies, English, Mathematics and Art Unit

Activity 12

Unscramble these Australian animal words

1. oaKla
2. umE
3. ognguD
4. syupPla
5. goDni
6. gaKnaoro
7. niamnaTsa lviDe
8. orkabrauok

Now make up 5 or 6 of your own (they don't necessarily have to be animals). When you are finished, you may like to do an illustration of one of them.