

**Travelling**



**New Zealand**



# Answer Sheet

## for Exercises:

### 'Map 1 - 4'

# North and South Islands



# Map 1



Using an atlas, find the names of the places listed below.

Green areas have special things about them. Write down what is special/famous about them.

# North Island 1

*Clues.  
Letters  
the town  
starts etc*

1	Benneydale	<i>Be</i>
2	Kapiti Island	<i>K I</i>
3	Ahipara	<i>Ah</i>
4	Cape Turnagain	<i>C T</i>
5	White Island	<i>W I</i>

6	Mangakino	<i>Ma</i>
7	Meremere	<i>Me</i>
8	Murupara	<i>Mu</i>
9	Porirua	<i>Po</i>

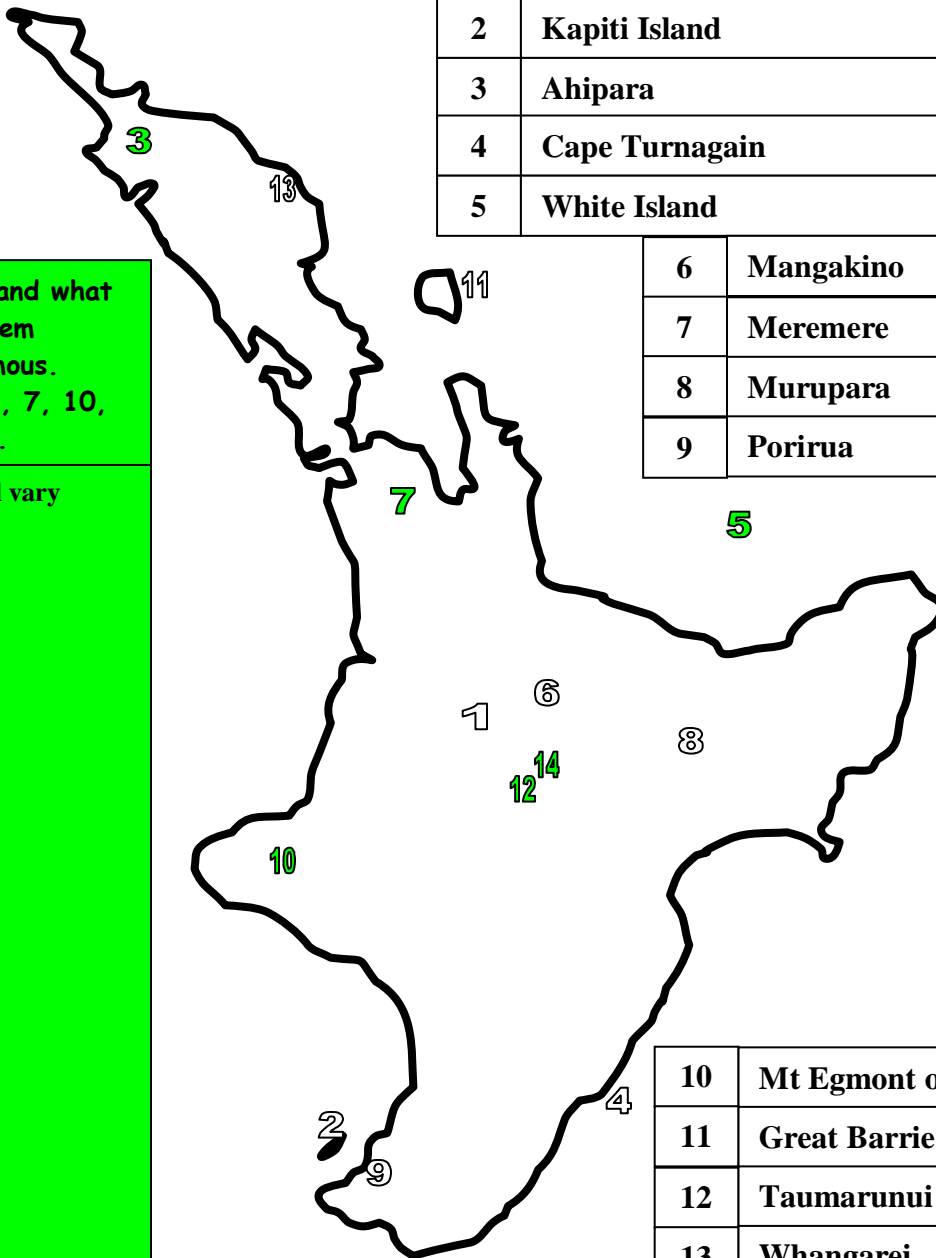
10	Mt Egmont or Taranaki	<i>Mt E or T</i>
11	Great Barrier Island	<i>G B I</i>
12	Taumarunui	<i>Ta</i>
13	Whangarei	<i>Wh</i>

14	Lake Taupo	<i>L T</i>
15	Three Kings Island	<i>T K I</i>

Special Places and what makes them special/famous.  
Numbers: 3, 5, 7, 10, 12, 14.

Answers will vary

15





# Map 2



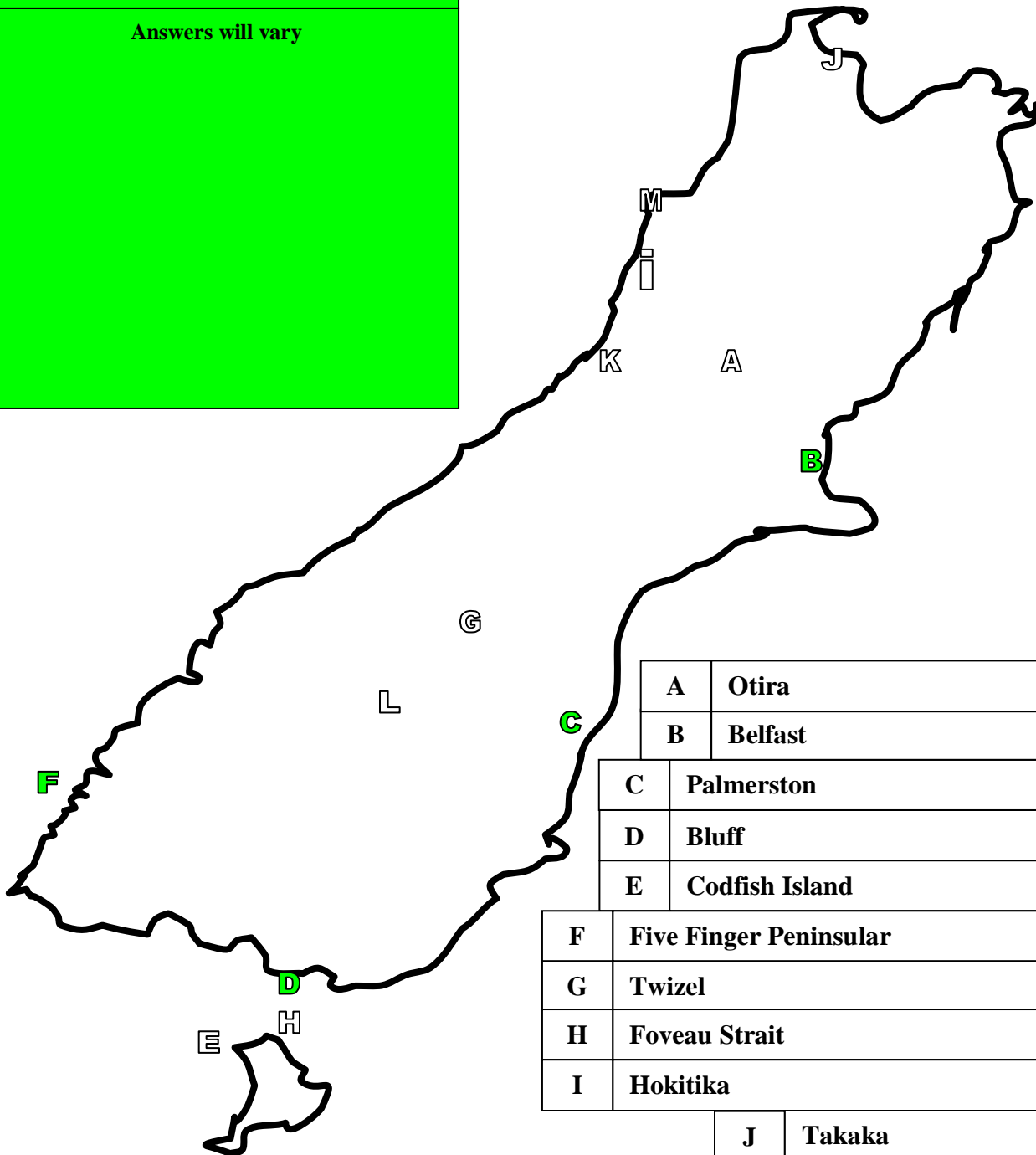
Using an atlas, find the names of the places listed below.

Green areas have special things about them. Write down what is special/famous about them.

# South Island 1

Special Places and what makes them special/famous: B, C, D, F

Answers will vary



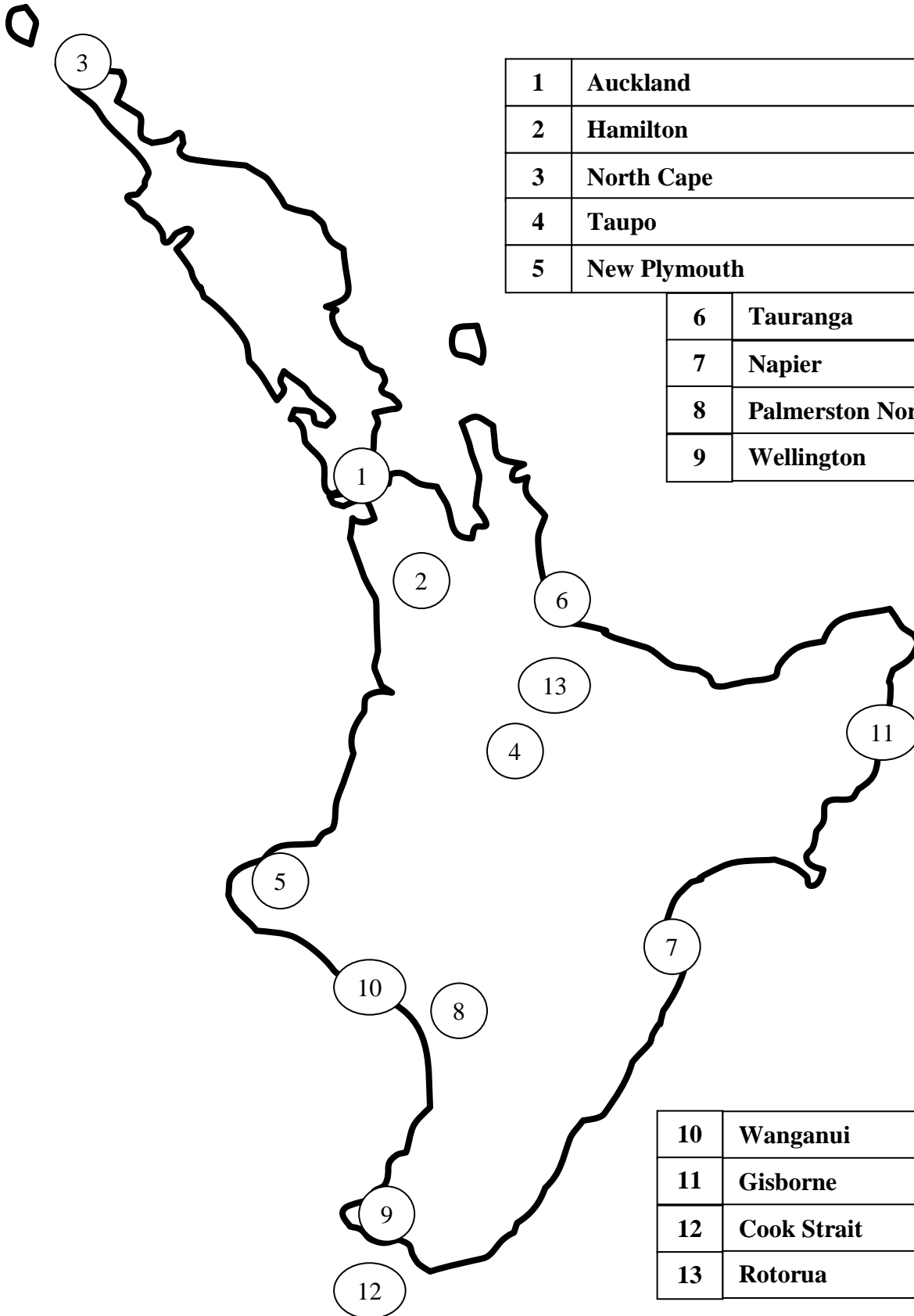
		Clues. Letters the town starts etc
A	Otira	Ot
B	Belfast	Be
C	Palmerston	Pa
D	Bluff	B
E	Codfish Island	C I
F	Five Finger Peninsular	F F P
G	Twizel	Tw
H	Foveau Strait	F S
I	Hokitika	Ho
J	Takaka	Ta
K	Ross	Ro
L	Wanaka	Wa
M	Westport	We



# North Island 2

*Clues.  
Letters  
the town  
starts etc*

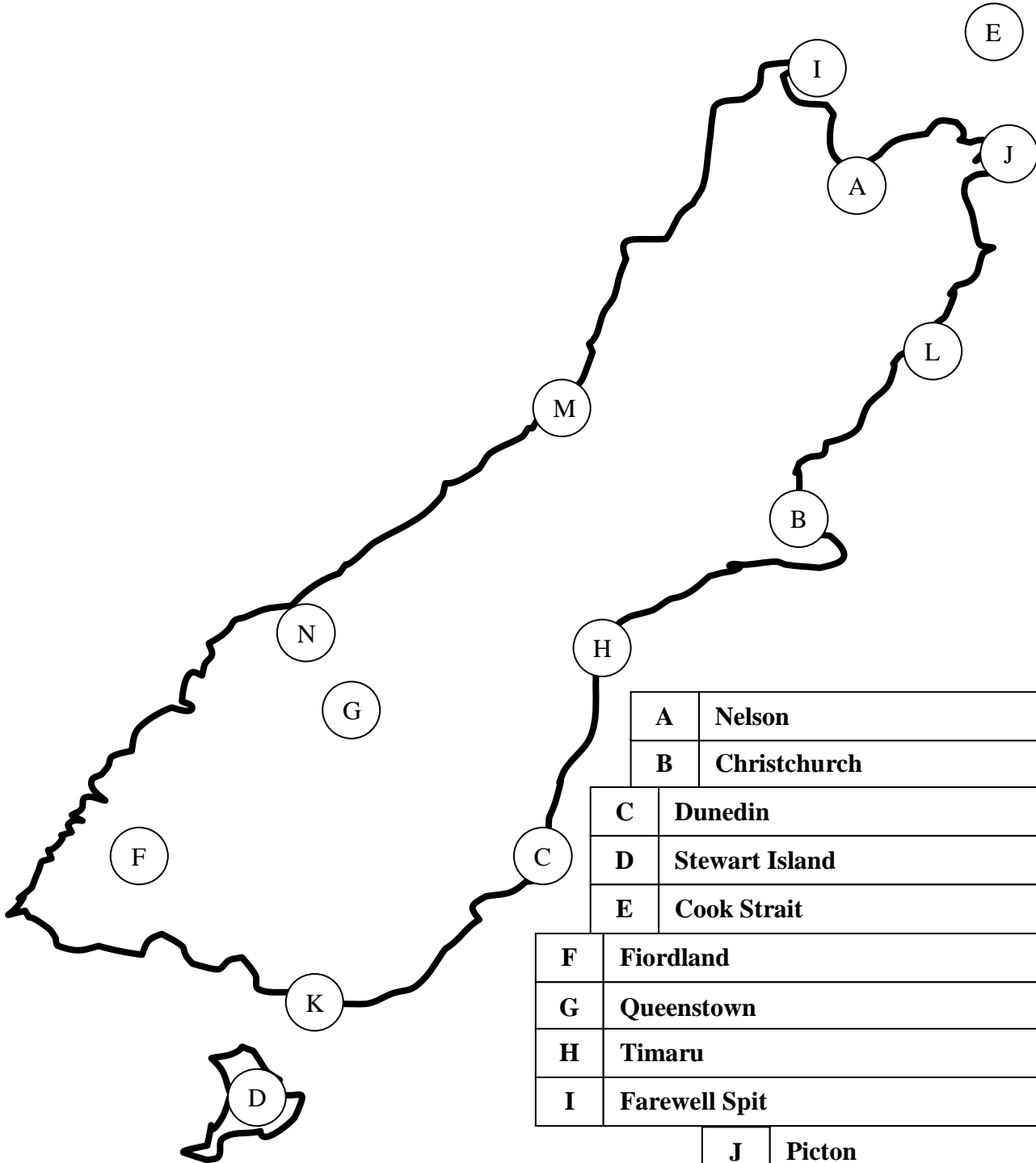
1	Auckland	A
2	Hamilton	H
3	North Cape	N C
4	Taupo	T
5	New Plymouth	N P
6	Tauranga	T
7	Napier	N
8	Palmerston North	P N
9	Wellington	W



10	Wanganui	W
11	Gisborne	G
12	Cook Strait	C S
13	Rotorua	R



# South Island 2



		<i>Clues. Letters the town starts etc</i>
A	Nelson	N
B	Christchurch	C
C	Dunedin	D
D	Stewart Island	S I
E	Cook Strait	C S
F	Fiordland	F
G	Queenstown	Q
H	Timaru	T
I	Farewell Spit	F S
J	Picton	P
K	Invercargill	I
L	Kaikoura	K
M	Ross	R
N	Milford Sound	M S