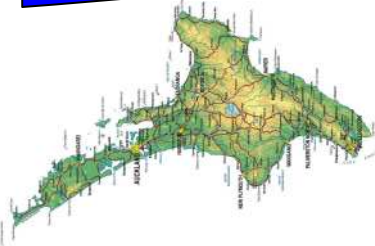



Where in Provincial New Zealand Am I?



Task Card 1

A Social Studies/English Unit



1. Name of the Town/Place? _____

2. Name of the Province/Area? _____

3. Closest Major City to the place? _____

4. Special Features of the town/area? _____

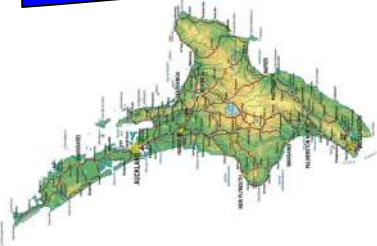
5. Name of the next nearest town or city N-S-E-W of the place:
North _____ South _____ East _____ West _____

6. Which Island is the place/area in? North or South? _____

7. *Draw/illustrate/make up either of the following using icons of the area, and/or images of the town/area which give the place its local flavour/identity:*


A. Currency B. Flag C. A new icon D. A poster E. Your own idea

Where in Provincial New Zealand Am I?



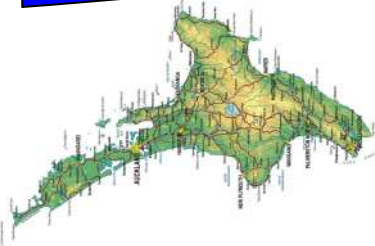
Task Card 2

A Social Studies/English Unit




1. Name of the Town/Place? _____
2. Name of the Province/Area? _____
3. Closest Major City to the place? _____
4. Special Features of the town/area? _____
5. Name of the next nearest town or city N-S-E-W of the place:
North _____ South _____ East _____ West _____
6. Which Island is the place/area in? North or South? _____
7. *Draw/illustrate/make up either of the following using icons of the area, and/or images of the town/area which give the place its local flavour/identity:*
A. Currency B. Flag C. A new icon D. A poster E. Your own idea

Where in Provincial New Zealand Am I?



Task Card 3

A Social Studies/English Unit



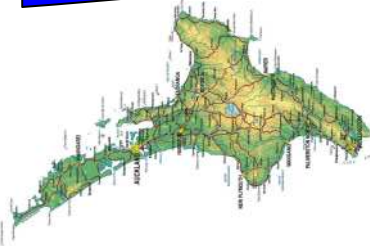
1. Name of the Town/Place? _____
2. Name of the Province/Area? _____
3. Closest Major City to the place? _____
4. Special Features of the town/area? _____

5. Name of the next nearest town or city N-S-E-W of the place:
North _____ South _____ East _____ West _____

6. Which Island is the place/area in? North or South? _____
7. *Draw/illustrate/make up either of the following using icons of the area, and/or images of the town/area which give the place its local flavour/identity:*


A. Currency B. Flag C. A new icon D. A poster E. Your own idea

Where in Provincial New Zealand Am I?



Task Card 4

A Social Studies/English Unit



1. Name of the Town/Place? _____

2. Name of the Province/Area? _____

3. Closest Major City to the place? _____

4. Special Features of the town/area? _____

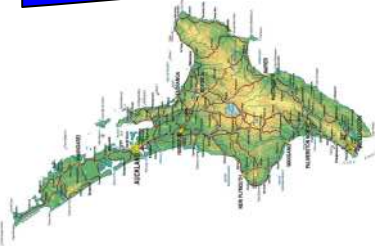
5. Name of the next nearest town or city N-S-E-W of the place:
North _____ South _____ East _____ West _____

6. Which Island is the place/area in? North or South? _____

7. *Draw/illustrate/make up either of the following using icons of the area, and/or images of the town/area which give the place it's local flavour/identity:*



A. Currency B. Flag C. A new icon D. A poster E. Your own idea

Where in Provincial New Zealand Am I?



Task Card 5

A Social Studies/English Unit



1. Name of the Town/Place? _____

2. Name of the Province/Area? _____

3. Closest Major City to the place? _____

4. Special Features of the town/area? _____

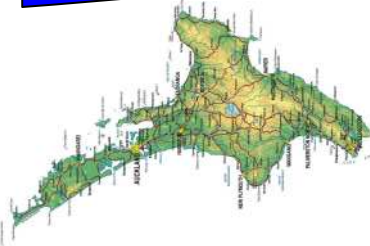
5. Name of the next nearest town or city N-S-E-W of the place:
North _____ South _____ East _____ West _____

6. Which Island is the place/area in? North or South? _____

7. *Draw/illustrate/make up either of the following using icons of the area, and/or images of the town/area which give the place it's local flavour/identity:*


A. Currency B. Flag C. A new icon D. A poster E. Your own idea

Where in Provincial New Zealand Am I?



Task Card 6

A Social Studies/English Unit



1. Name of the Town/Place? _____

2. Name of the Province/Area? _____

3. Closest Major City to the place? _____

4. Special Features of the town/area? _____

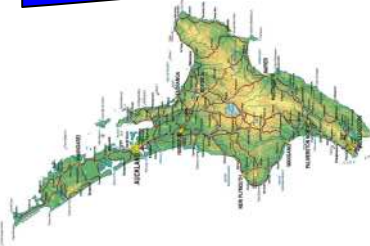
5. Name of the next nearest town or city N-S-E-W of the place:
North _____ South _____ East _____ West _____

6. Which Island is the place/area in? North or South? _____

7. *Draw/illustrate/make up either of the following using icons of the area, and/or images of the town/area which give the place it's local flavour/identity:*


A. Currency B. Flag C. A new icon D. A poster E. Your own idea

Where in Provincial New Zealand Am I?



Task Card 7

A Social Studies/English Unit



1. Name of the Town/Place? _____

2. Name of the Province/Area? _____

3. Closest Major City to the place? _____

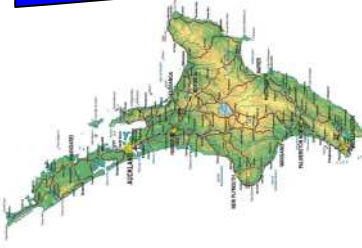
4. Special Features of the town/area? _____

5. Name of the next nearest town or city N-S-E-W of the place:
North _____ South _____ East _____ West _____

6. Which Island is the place/area in? North or South? _____

7. *Draw/illustrate/make up either of the following using icons of the area, and/or images of the town/area which give the place it's local flavour/identity:*

A. Currency B. Flag C. A new icon D. A poster E. Your own idea




Where in Provincial New Zealand Am I?



Task Card 8

A Social Studies/English Unit



1. Name of the Town/Place? _____

2. Name of the Province/Area? _____

3. Closest Major City to the place? _____

4. Special Features of the town/area? _____

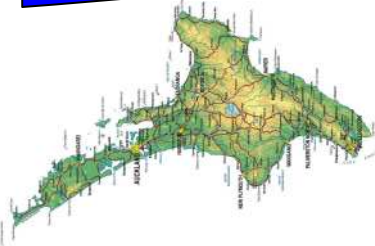
5. Name of the next nearest town or city N-S-E-W of the place:
North _____ South _____ East _____ West _____

6. Which Island is the place/area in? North or South? _____

7. *Draw/illustrate/make up either of the following using icons of the area, and/or images of the town/area which give the place it's local flavour/identity:*


A. Currency B. Flag C. A new icon D. A poster E. Your own idea

Where in Provincial New Zealand Am I?



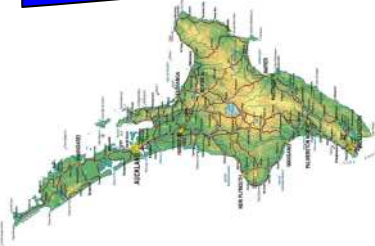
Task Card 9

A Social Studies/English Unit




1. Name of the Town/Place? _____
2. Name of the Province/Area? _____
3. Closest Major City to the place? _____
4. Special Features of the town/area? _____
5. Name of the next nearest town or city N-S-E-W of the place:
North _____ South _____ East _____ West _____
6. Which Island is the place/area in? North or South? _____
7. *Draw/illustrate/make up either of the following using icons of the area, and/or images of the town/area which give the place it's local flavour/identity:*
A. Currency B. Flag C. A new icon D. A poster E. Your own idea

Where in Provincial New Zealand Am I?



Task Card 10

A Social Studies/English Unit



1. Name of the Town/Place? _____

2. Name of the Province/Area? _____

3. Closest Major City to the place? _____

4. Special Features of the town/area? _____

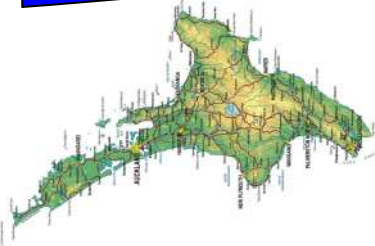
5. Name of the next nearest town or city N-S-E-W of the place:
North _____ South _____ East _____ West _____

6. Which Island is the place/area in? North or South? _____

7. *Draw/illustrate/make up either of the following using icons of the area, and/or images of the town/area which give the place it's local flavour/identity:*


A. Currency B. Flag C. A new icon D. A poster E. Your own idea

Where in Provincial New Zealand Am I?



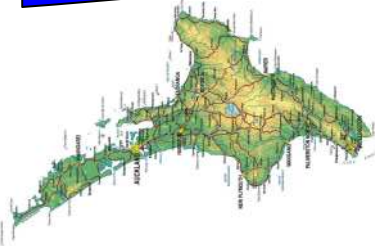
Task Card 11

A Social Studies/English Unit




1. Name of the Town/Place? _____
2. Name of the Province/Area? _____
3. Closest Major City to the place? _____
4. Special Features of the town/area? _____
5. Name of the next nearest town or city N-S-E-W of the place:
North _____ South _____ East _____ West _____
6. Which Island is the place/area in? North or South? _____
7. *Draw/illustrate/make up either of the following using icons of the area, and/or images of the town/area which give the place its local flavour/identity:*
A. Currency B. Flag C. A new icon D. A poster E. Your own idea

Where in Provincial New Zealand Am I?



Task Card 12

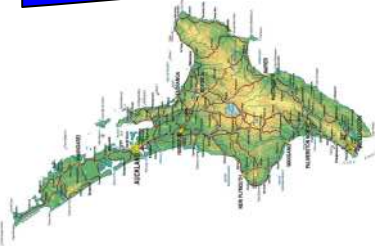
A Social Studies/English Unit



1. Name of the Town/Place? _____
2. Name of the Province/Area? _____
3. Closest Major City to the place? _____
4. Special Features of the town/area? _____


5. Name of the next nearest town or city N-S-E-W of the place:
North _____ South _____ East _____ West _____
6. Which Island is the place/area in? North or South? _____
7. *Draw/illustrate/make up either of the following using icons of the area, and/or images of the town/area which give the place its local flavour/identity:*
A. Currency B. Flag C. A new icon D. A poster E. Your own idea

Where in Provincial New Zealand Am I?



Task Card 13

A Social Studies/English Unit

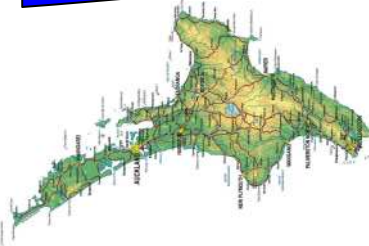


1. Name of the Town/Place? _____
2. Name of the Province/Area? _____
3. Closest Major City to the place? _____
4. Special Features of the town/area? _____

5. Name of the next nearest town or city N-S-E-W of the place:
North South East West



6. Which Island is the place/area in? North or South? _____
7. *Draw/illustrate/make up either of the following using icons of the area, and/or images of the town/area which give the place its local flavour/identity:*
A. Currency B. Flag C. A new icon D. A poster E. Your own idea

Where in Provincial New Zealand Am I?



Task Card 14

A Social Studies/English Unit



hit

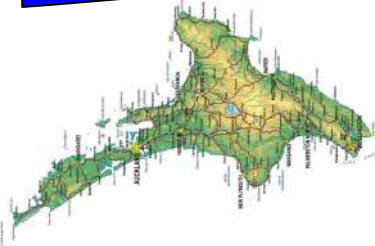
1. Name of the Town/Place? _____
2. Name of the Province/Area? _____
3. Closest Major City to the place? _____
4. Special Features of the town/area? _____

5. Name of the next nearest town or city N-S-E-W of the place:
North _____ South _____ East _____ West _____

6. Which Island is the place/area in? North or South? _____
7. *Draw/illustrate/make up either of the following using icons of the area, and/or images of the town/area which give the place its local flavour/identity:*



A. Currency B. Flag C. A new icon D. A poster E. Your own idea

Where in Provincial New Zealand Am I?



Task Card 15

A Social Studies/English Unit



1. Name of the Town/Place? _____

2. Name of the Province/Area? _____

3. Closest Major City to the place? _____

4. Special Features of the town/area? _____

5. Name of the next nearest town or city N-S-E-W of the place:

North

South

East


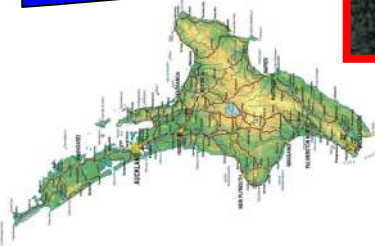
West

6. Which Island is the place/area in? North or South? _____

7. *Draw/illustrate/make up either of the following using icons of the area, and/or images of the town/area which give the place it's local flavour/identity:*


A. Currency B. Flag C. A new icon D. A poster E. Your own idea

Where in Provincial New Zealand Am I?

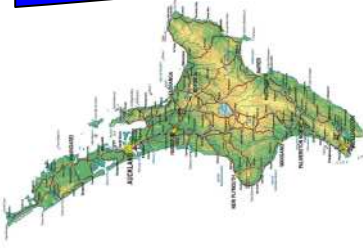


Task Card 16

A Social Studies/English Unit



1. Name of the Town/Place? _____
2. Name of the Province/Area? _____
3. Closest Major City to the place? _____
4. Special Features of the town/area? _____
5. Name of the next nearest town or city N-S-E-W of the place:
North _____ South _____ East _____ West _____
6. Which Island is the place/area in? North or South? _____
7. *Draw/illustrate/make up either of the following using icons of the area, and/or images of the town/area which give the place its local flavour/identity:*
A. Currency B. Flag C. A new icon D. A poster E. Your own idea




Where in Provincial New Zealand Am I?



Task Card 17

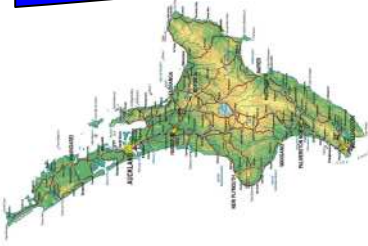
A Social Studies/English Unit



- Name of the Town/Place? _____
- Name of the Province/Area? _____
- Closest Major City to the place? _____
- Special Features of the town/area? _____

- Name of the next nearest town or city N-S-E-W of the place:
North South East West

- Which Island is the place/area in? North or South? _____
- Draw/illustrate/make up either of the following using icons of the area, and/or images of the town/area which give the place its local flavour/identity:*
A. Currency B. Flag C. A new icon D. A poster E. Your own idea




Where in Provincial New Zealand Am I?



Task Card 18

A Social Studies/English Unit



1. Name of the Town/Place? _____
2. Name of the Province/Area? _____
3. Closest Major City to the place? _____
4. Special Features of the town/area? _____

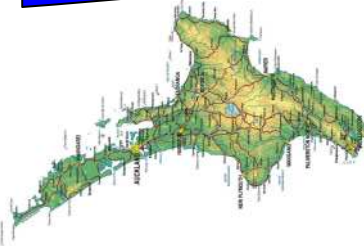
5. Name of the next nearest town or city N-S-E-W of the place:
North South East West

6. Which Island is the place/area in? North or South? _____

7. *Draw/illustrate/make up either of the following using icons of the area, and/or images of the town/area which give the place its local flavour/identity:*


- A. Currency B. Flag C. A new icon D. A poster E. Your own idea

Where in Provincial New Zealand Am I?



Task Card 19

A Social Studies/English Unit



1. Name of the Town/Place? _____

2. Name of the Province/Area? _____

3. Closest Major City to the place? _____

4. Special Features of the town/area? _____

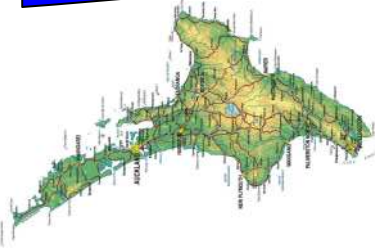
5. Name of the next nearest town or city N-S-E-W of the place:
North _____ South _____ East _____ West _____

6. Which Island is the place/area in? North or South? _____

7. *Draw/illustrate/make up either of the following using icons of the area, and/or images of the town/area which give the place its local flavour/identity:*



A. Currency B. Flag C. A new icon D. A poster E. Your own idea

Where in Provincial New Zealand Am I?



Task Card 20

A Social Studies/English Unit



1. Name of the Town/Place? _____
2. Name of the Province/Area? _____
3. Closest Major City to the place? _____
4. Special Features of the town/area? _____

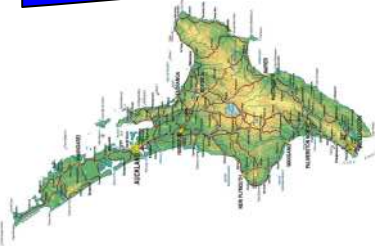
5. Name of the next nearest town or city N-S-E-W of the place:
North South East West

6. Which Island is the place/area in? North or South? _____

7. *Draw/illustrate/make up either of the following using icons of the area, and/or images of the town/area which give the place its local flavour/identity:*


- A. Currency B. Flag C. A new icon D. A poster E. Your own idea

Where in Provincial New Zealand Am I?



Task Card 21

A Social Studies/English Unit

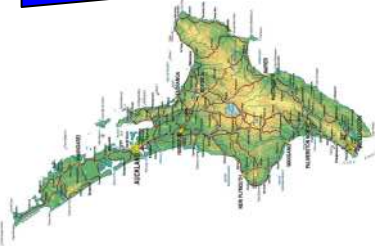


1. Name of the Town/Place? _____
2. Name of the Province/Area? _____
3. Closest Major City to the place? _____
4. Special Features of the town/area? _____

5. Name of the next nearest town or city N-S-E-W of the place:
North South East West

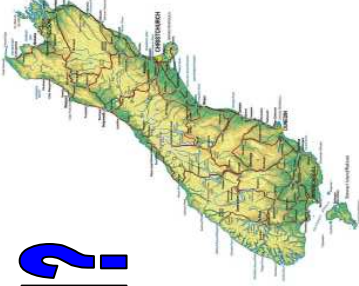

6. Which Island is the place/area in? North or South? _____
7. *Draw/illustrate/make up either of the following using icons of the area, and/or images of the town/area which give the place its local flavour/identity:*
A. Currency B. Flag C. A new icon D. A poster E. Your own idea

Where in Metropolitan New Zealand Am I?



Task Card 22

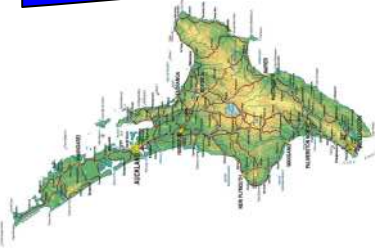
A Social Studies/English Unit



1. Name of the City? _____
2. Name of the Province/Area? _____
3. Closest Next Major City to the place? _____
4. Special Features of the town/area? _____


5. Name of the next nearest town or city N-S-E-W of the place:
North _____ South _____ East _____ West _____
6. Which Island is the place/area in? North or South? _____
7. *Draw/illustrate/make up either of the following using icons of the area, and/or images of the town/area which give the place its local flavour/identity:*
A. Currency B. Flag C. A new icon D. A poster E. Your own idea

Where in Provincial New Zealand Am I?



Task Card 23

A Social Studies/English Unit



1. Name of the Town/Place? _____

2. Name of the Province/Area? _____

3. Closest Major City to the place? _____

4. Special Features of the town/area? _____


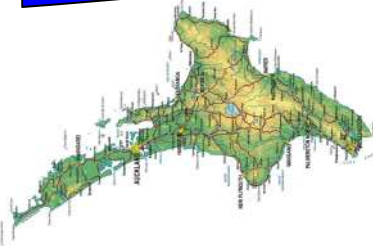
5. Name of the next nearest town or city N-S-E-W of the place:
North South East West

6. Which Island is the place/area in? North or South? _____

7. *Draw/illustrate/make up either of the following using icons of the area, and/or images of the town/area which give the place its local flavour/identity:*


A. Currency B. Flag C. A new icon D. A poster E. Your own idea

Where in Provincial New Zealand Am I?



Task Card 24

A Social Studies/English Unit

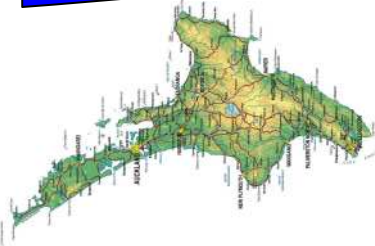


1. Name of the Town/Place? _____
2. Name of the Province/Area? _____
3. Closest Major City to the place? _____
4. Special Features of the town/area? _____
5. Name of the next nearest town or city N-S-E-W of the place:
North _____ South _____ East _____ West _____
6. Which Island is the place/area in? North or South? _____

7. *Draw/illustrate/make up either of the following using icons of the area, and/or images of the town/area which give the place its local flavour/identity:*


- A. Currency B. Flag C. A new icon D. A poster E. Your own idea

Where in Provincial New Zealand Am I?



Task Card 25

A Social Studies/English Unit



1. Name of the Town/Place? _____

2. Name of the Province/Area? _____

3. Closest Major City to the place? _____

4. Special Features of the town/area? _____

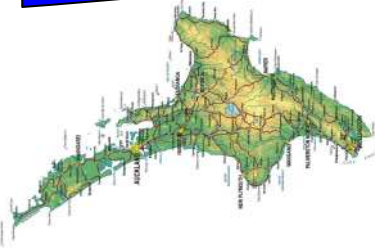
5. Name of the next nearest town or city N-S-E-W of the place:
North _____ South _____ East _____ West _____

6. Which Island is the place/area in? North or South? _____

7. *Draw/illustrate/make up either of the following using icons of the area, and/or images of the town/area which give the place its local flavour/identity:*


A. Currency B. Flag C. A new icon D. A poster E. Your own idea

Where in Provincial New Zealand Am I?



Task Card 26

A Social Studies/English Unit



1. Name of the Town/Place? _____
2. Name of the Province/Area? _____
3. Closest Major City to the place? _____
4. Special Features of the town/area? _____


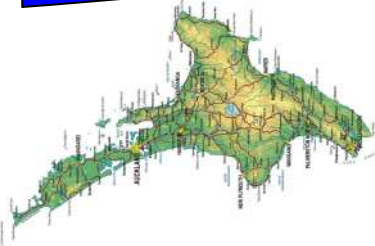
5. Name of the next nearest town or city N-S-E-W of the place:
North _____ South _____ East _____ West _____

6. Which Island is the place/area in? North or South? _____

7. *Draw/illustrate/make up either of the following using icons of the area, and/or images of the town/area which give the place its local flavour/identity:*


A. Currency B. Flag C. A new icon D. A poster E. Your own idea

Where in Provincial New Zealand Am I?




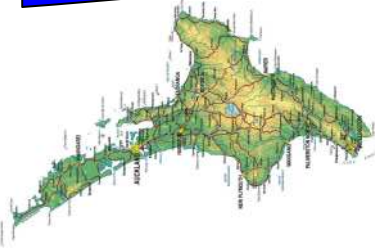
Task Card 27

A Social Studies/English Unit




1. Name of the Town/Place? _____
2. Name of the Province/Area? _____
3. Closest Major City to the place? _____
4. Special Features of the town/area? _____
5. Name of the next nearest town or city N-S-E-W of the place:
North South East West
6. Which Island is the place/area in? North or South? _____
7. *Draw/illustrate/make up either of the following using icons of the area, and/or images of the town/area which give the place its local flavour/identity:*
A. Currency B. Flag C. A new icon D. A poster E. Your own idea

Where in Provincial New Zealand Am I?



Task Card 28

A Social Studies/English Unit



1. Name of the Town/Place? _____

2. Name of the Province/Area? _____

3. Closest Major City to the place? _____

4. Special Features of the town/area? _____

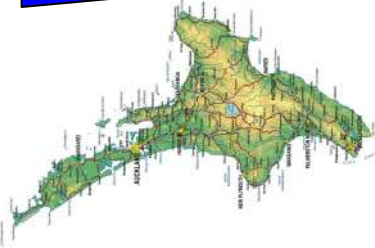
5. Name of the next nearest town or city N-S-E-W of the place:
North _____ South _____ East _____ West _____

6. Which Island is the place/area in? North or South? _____

7. *Draw/illustrate/make up either of the following using icons of the area, and/or images of the town/area which give the place its local flavour/identity:*


A. Currency B. Flag C. A new icon D. A poster E. Your own idea

Where in Metropolitan New Zealand Am I?



Task Card 29

A Social Studies/English Unit



1. Name of the City? _____

2. Name of the Province/Area? _____

3. Closest Next Major City to the place? _____

4. Special Features of the town/area? _____

5. Name of the next nearest town or city N-S-E-W of the place:

North

South

East

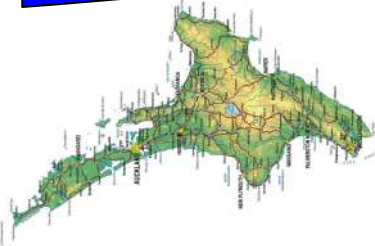
West

6. Which Island is the place/area in? North or South? _____

7. *Draw/illustrate/make up either of the following using icons of the area, and/or images of the town/area which give the place its local flavour/identity:*


A. Currency B. Flag C. A new icon D. A poster E. Your own idea

Where in Provincial New Zealand Am I?



Task Card 30

A Social Studies/English Unit



1. Name of the Town/Place? _____

2. Name of the Province/Area? _____

3. Closest Major City to the place? _____

4. Special Features of the town/area? _____


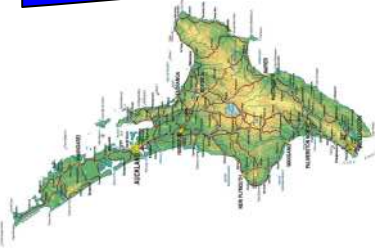
5. Name of the next nearest town or city N-S-E-W of the place:
North _____ South _____ East _____ West _____

6. Which Island is the place/area in? North or South? _____

7. *Draw/illustrate/make up either of the following using icons of the area, and/or images of the town/area which give the place its local flavour/identity:*


A. Currency B. Flag C. A new icon D. A poster E. Your own idea

Where in Provincial New Zealand Am I?



Task Card 31

A Social Studies/English Unit



1. Name of the Town/Place? _____

2. Name of the Province/Area? _____

3. Closest Major City to the place? _____

4. Special Features of the town/area? _____

5. Name of the next nearest town or city N-S-E-W of the place:

North

South

East


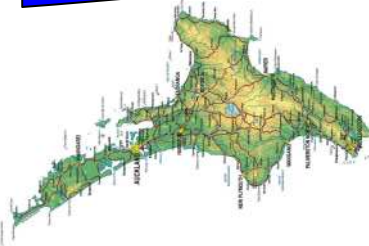
West

6. Which Island is the place/area in? North or South? _____

7. *Draw/illustrate/make up either of the following using icons of the area, and/or images of the town/area which give the place its local flavour/identity:*

A. Currency B. Flag C. A new icon D. A poster E. Your own idea

Where in Provincial New Zealand Am I?



Task Card 32

A Social Studies/English Unit



1. Name of the Town/Place? _____

2. Name of the Province/Area? _____

3. Closest Major City to the place? _____

4. Special Features of the town/area? _____

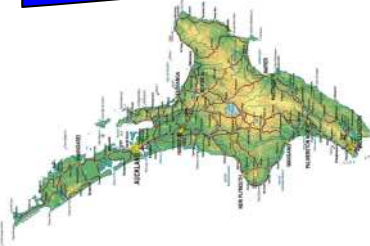
5. Name of the next nearest town or city N-S-E-W of the place:
North _____ South _____ East _____ West _____

6. Which Island is the place/area in? North or South? _____

7. *Draw/illustrate/make up either of the following using icons of the area, and/or images of the town/area which give the place its local flavour/identity:*


A. Currency B. Flag C. A new icon D. A poster E. Your own idea

Where in Provincial New Zealand Am I?



Task Card 33

A Social Studies/English Unit



1. Name of the Town/Place? _____

(it is not the City shown in the clue, but is near it)

2. Name of the Province/Area? _____

3. Closest Major City to the place? _____

4. Special Features of the town/area? _____

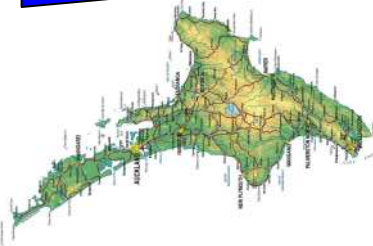
5. Name of the next nearest town or city N-S-E-W of the place:
North _____ South _____ East _____ West _____

6. Which Island is the place/area in? North or South? _____

7. *Draw/illustrate/make up either of the following using icons of the area, and/or images of the town/area which give the place its local flavour/identity:*


A. Currency B. Flag C. A new icon D. A poster E. Your own idea

Where in Metropolitan New Zealand Am I?



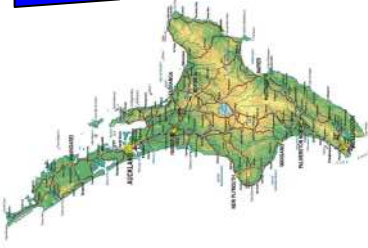
Task Card 34

A Social Studies/English Unit



1. Name of the City? _____
2. Name of the Province/Area? _____
3. Closest Next Major City to the place? _____
4. Special Features of the town/area? _____

5. Name of the next nearest town or city N-S-E-W of the place:
North _____ South _____ East _____ West _____
6. Which Island is the place/area in? North or South? _____
7. *Draw/illustrate/make up either of the following using icons of the area, and/or images of the town/area which give the place its local flavour/identity:*
A. Currency B. Flag C. A new icon D. A poster E. Your own idea




Where in Provincial or Metropolitan New Zealand Am I?



Task Card 35

A Social Studies/English Unit



Make up your own one with images.

1. Name of the Town/Place? _____
2. Name of the Province/Area? _____
3. Closest Major City to the place? _____
4. Special Features of the town/area? _____

5. Name of the next nearest town or city N-S-E-W of the place:
North _____ South _____ East _____ West _____

6. Which Island is the place/area in? North or South? _____

7. *Draw/illustrate/make up either of the following using icons of the area, and/or images of the town/area which give the place it's local flavour/identity:*

- A. Currency B. Flag C. A new icon D. A poster E. Your own idea



Where in Provincial / Metropolitan New Zealand Am I? ANSWERS for Task Cards 1-35



Card Number	Name of Place (Icon)	North or South Island?	Card Number	Name of Place (Icon)	North or South Island?
1	Ohakune (Carrot)	North	20	Tekapo/Lake Tekapo (Border Collie and historic church)	South
2	Hangatiki - Waitomo Caves turnoff between Otorohanga and Te Kuiti (Apple)	North	21	Stratford (Tower) (Southern Taranaki)	North
3	Bulls (Bull)	North	22	New Plymouth (Wind Wand)(City)	North
4	Hunterville (Hunterway Dog)	North	23	Whakapapa / Chateau (Mountain/Famous Hotel)	North
5	Otorohanga (Kiwiana)	North	24	Huntly (Power Station)	North
6	Te Kuiti (Shearer)	North	25	Ruawai (Kumara) (South of Dargaville)	North
7	Hamilton Airport/ Mystery Creek about 10kms out of Hamilton City	North	26	Tirau (Arts and Crafts/Farming) (Between Cambridge and Putaruru)	North
8	Taumarunui on the main trunk line/Gateway to the "Forgotten World Highway" to Stratford	North	27	Tokoroa (Forestry)	North
9	Viaduct between National Park and Ohakune on sharp bend in road	North	28	Turangi (Trout Fishing)	North
10	National Park (Gateway to Ski fields at Whakapapa)	North	29	Auckland (City) (The big smoke)	North
11	Picton - Gateway to the South Island/Interisland ferries port	South	30	Mangonui (Fishing/famous fish shop over water). (Bay of Islands area)	North
12	Bluff (Oysters/Paua Shell House)	South	31	Cape Reinga Lighthouse (End of NZ)	North
13	Hokitika	South	32	Paihia (Tourist spot) (Bay of Islands)	North
14	Cromwell (Fruit/Nectarines)	South	33	Upukongaro (Moa). (Out of Wanganui)	North
15	Oamaru (Blue Penguin Colony)	South	34	Whangarei (gateway to the North)	North
16	Tuatapere - Sausage Capital	South	35	Children Make up their own	Either
17	Gore (Trout)	South			
18	Riverton (Paua Shell)	South			
19	Kaikoura (Crayfish/Whale watching)	South			

